

1. Answer the following questions.

i. How many sense organs are there in our body?

Ans:

ii. Write the names of senses.

.....



iii. Write the names of sense organs.

.....



iv. Which body part do you use to look at the sun or moon?

Ans:

v. Which body part is used to listen the chirping of the birds?

Ans:

vi. A Rose has a sweet smell. How would you know that?

Ans:

vii. Which organ of your body is used for tasting ice-cream?

Ans:

viii. When you sweat in summer, how do you feel?

Ans:

5. Words Search

Find these words in the words grid.

Sour, Sweet, Warm, Salty, Bitter

S	F	A	T	S	A	F	F	A
K	U	H	F	S	O	U	R	D
I	T	O	S	W	D	A	F	Y
G	E	T	A	E	E	W	B	A
P	O	N	L	E	E	A	S	M
O	B	I	T	T	E	R	A	E
K	S	C	Y	A	E	M	P	E
E	T	S	D	T	Y	A	A	P

6. Jumbled Words

- i. TSAET _____
- ii. OUEGTN _____
- iii. ONSE _____
- iv. LEMSL _____
- v. IKS N _____
- vi. ERAHGIN _____
- vii. IHGST _____
- viii. ARES _____
- ix. EEYS _____
- x. HOTUC _____

7. Columns

Match the parts of the body with their functions.

Senses

Sight •

Hear •

Smell •

Taste •

Touch •

Sense organs

• Ears

• Nose

• Eyes

• Skin

• Tongue

Pictures



8. Fill in the blanks using the given words.

Eyes	Touch	Smell	Sour	Ears
------	-------	-------	------	------

- i. Dogs can _____ from a long distance.
- ii. Snakes do not have _____. They hear with their jaw-bone.
- iii. Can you read a book with your _____ closed?
- iv. The taste of lemon is _____.
- v. Our sense of _____ tells us about Cold.


9. Write “T” for the true and “F” for the false statement.

- i. We can see colours with our eyes.
- ii. Samosas are saltish.
- ii. We can taste something with our ears.
- v. The organs that tell us about the ringing of school bell is our ears.
- v. The unwashed socks smell pleasant.













10. Label the diagram.

Senses and sense organs



11. Drag and Drop

Look at the pictures and write their names in the relevant column.


Ear	Hearing	Tongue	Nose	Smell
				
Sight	Skin	Touch	Eye	Taste
				

Senses

Sense Organs

12. Comprehension

Fill in the blanks with senses after reading the paragraph and observing the picture carefully.



- a) Mother is using her sense of _____ and _____ to knead the flour.
- b) The girl is using her sense of _____ and _____.
- c) The boy is using his sense of _____ and _____ to watch television, and his sense of _____ to enjoy the drink.
- d) They are all using their sense of _____, while the food is cooking on the stove.